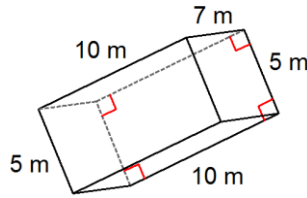
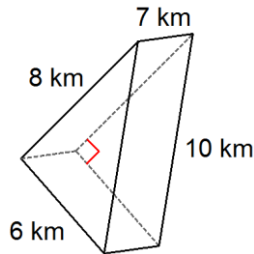


Unit 7 (Chps 11 & 12) Review Area and Volume **SHOW WORK**

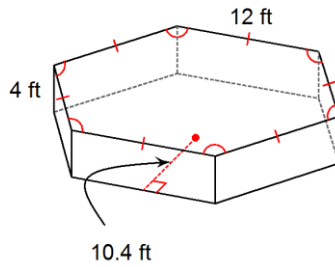
1. Name of Shape _____
 Lateral Area _____
 Surface Area _____
 Volume _____



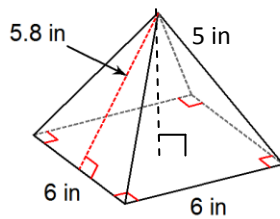
2. Name of Shape _____
 Lateral Area _____
 Surface Area _____
 Volume _____



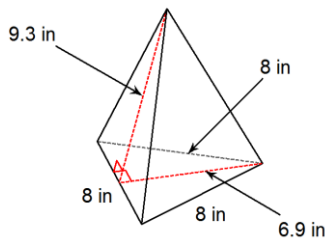
3. Name of Shape _____
 Lateral Area _____
 Surface Area _____
 Volume _____



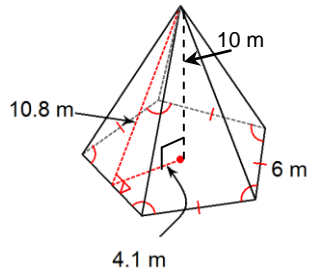
4. Name of Shape _____
 Lateral Area _____
 Surface Area _____
 Volume _____



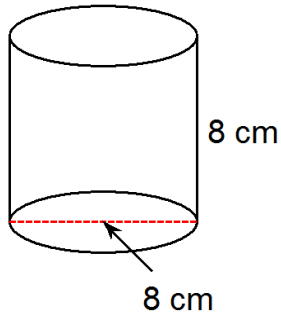
5. Name of Shape _____
 Lateral Area _____
 Surface Area _____
 Volume _____



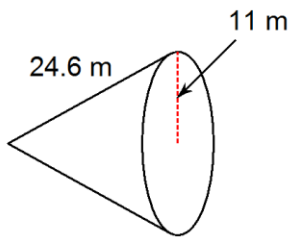
6. Name of Shape _____
 Lateral Area _____
 Surface Area _____
 Volume _____



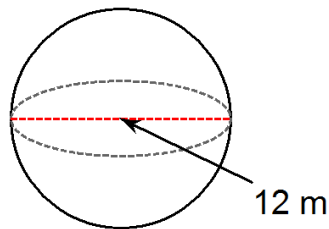
7. Name of Shape _____
 Lateral Area _____
 Surface Area _____
 Volume _____



8. Name of Shape _____
 Lateral Area _____
 Surface Area _____
 Volume _____



9. Name of Shape _____
 Surface Area _____
 Volume _____



10. Name of Shape _____
 Surface Area _____
 Volume _____

