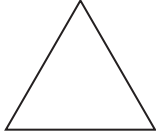


# 9-5 Skills Practice


## Symmetry

State whether the figure appears to have line symmetry. Write *yes* or *no*. If so, draw all lines of symmetry and state their number.

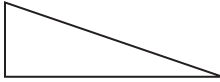
1.




2.



3.

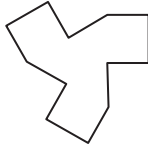


4.

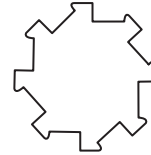


State whether the figure has rotational symmetry. Write *yes* or *no*. If so, locate the center of symmetry, and state the order and magnitude of symmetry.

5.



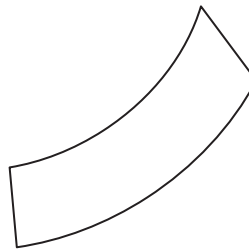
6.



7.

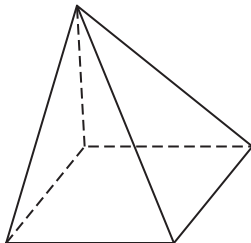


8.



State whether the figure has *plane* symmetry, *axis* symmetry, *both*, or *neither*.

9.



10.

