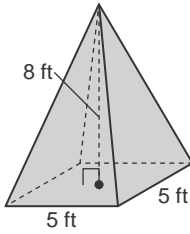


# 12-5 Skills Practice

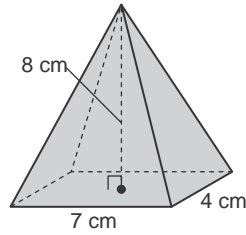
## Volumes of Pyramids and Cones

Find the volume of each pyramid or cone. Round to the nearest tenth if necessary.

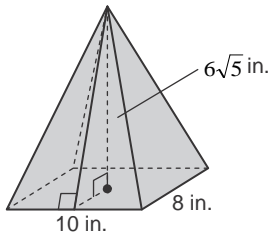
1.



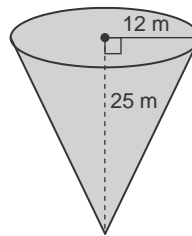
2.



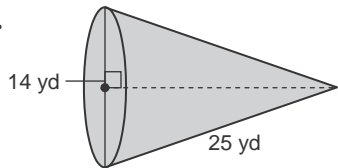
3.



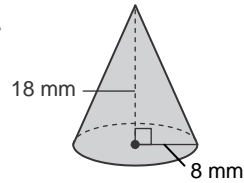
4.



5.

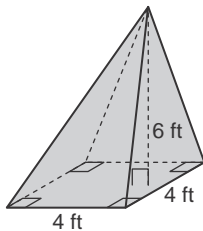


6.



Find the volume of each oblique pyramid or cone. Round to the nearest tenth if necessary.

7.



8.

