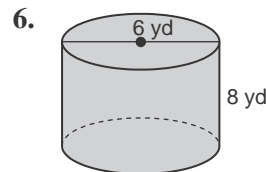
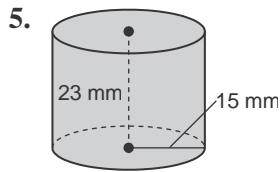
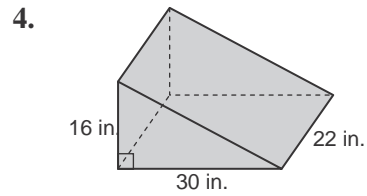
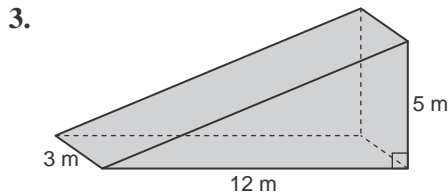
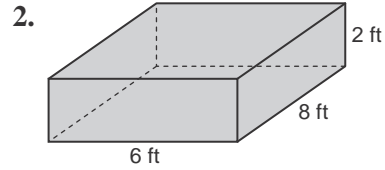
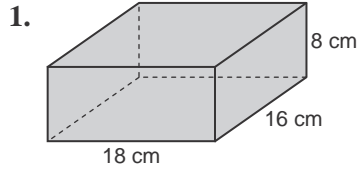


12-4 Skills Practice

Volumes of Prisms and Cylinders

Find the volume of each prism or cylinder. Round to the nearest tenth if necessary.



Find the volume of each oblique prism or cylinder. Round to the nearest tenth if necessary.

