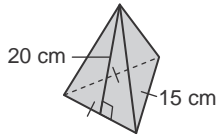


# 12-3 Study Guide

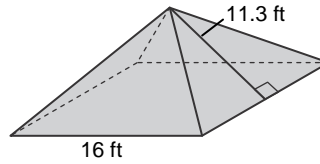
## Surface Areas of Pyramids and Cones

Find the lateral area and surface area of each pyramid. Round to the nearest tenth if necessary.

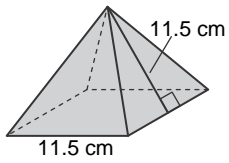
1.



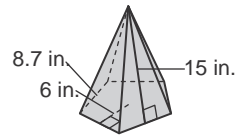
2.



3.

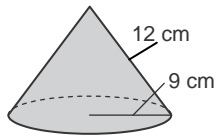


4.

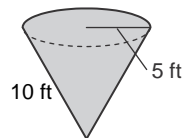


Find the lateral area and surface area of each cone. Round to the nearest tenth if necessary.

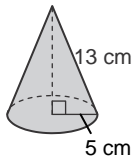
5.



6.



7.



8.

