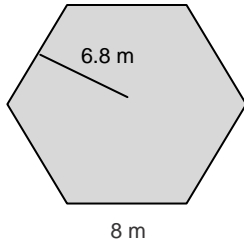


11-4 Skills Practice

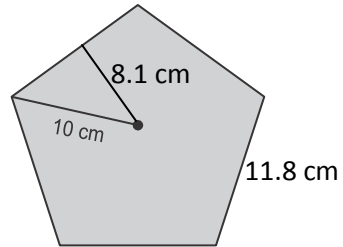
Areas of Regular Polygons and Composite Figures

Find the area of each regular polygon. Round to the nearest tenth.

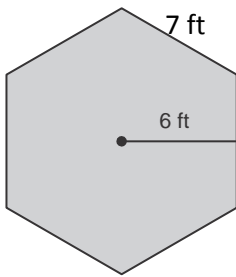
1.



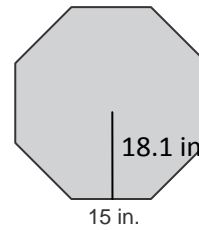
2.



3.

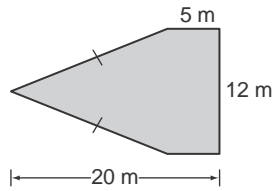


4.

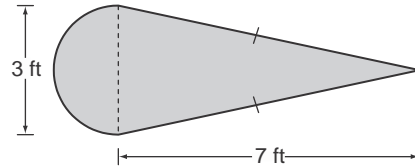


Find the area of each figure. Round to the nearest tenth if necessary.

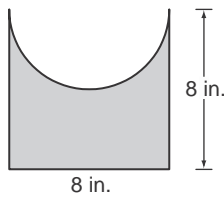
5.



6.



7.



8.

