

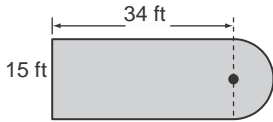
# 11-4 Study Guide and Intervention *(continued)*

## Areas of Regular Polygons and Composite

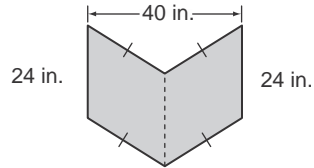
### Exercises

Find the area of each figure. Round to the nearest tenth if necessary.

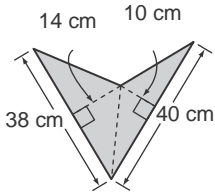
1. *Example*



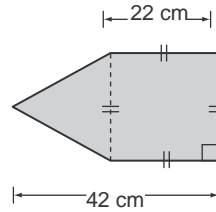
2.



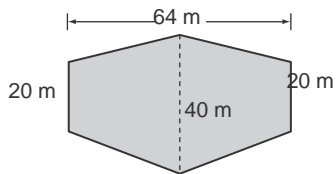
3.



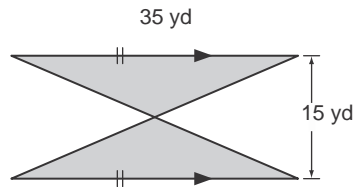
4.



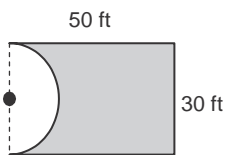
5.



6.



7.



8.

