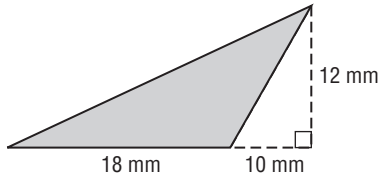


11-1 Skills Practice

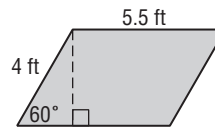
Areas of Parallelograms and Triangles

Find the perimeter and area of each parallelogram or triangle. Round to the nearest tenth if necessary.

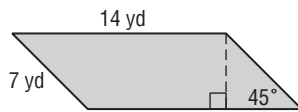
1.



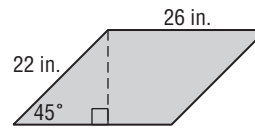
2.



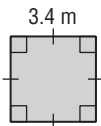
3.



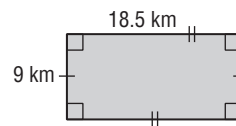
4.



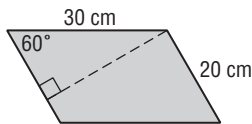
5.



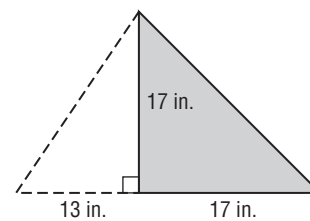
6.



7.



8.



9. The height of a parallelogram is 10 feet more than its base. If the area of the parallelogram is 1200 square feet, find its base and height.

10. The base of a triangle is one half of its height. If the area of the triangle is 196 square millimeters, find its base and height.