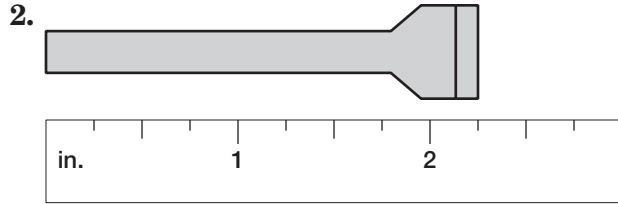
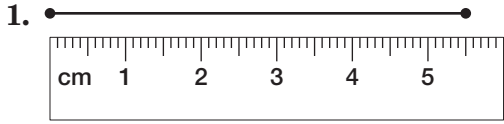


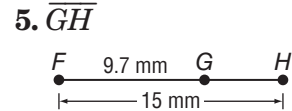
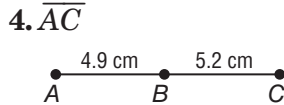
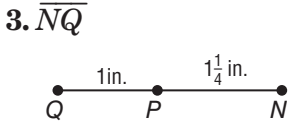
1-2 Skills Practice

Linear Measure

Find the length of each line segment or object.



Find the measurement of each segment. Assume that each figure is not drawn to scale.



ALGEBRA Find the value of x and YZ if Y is between X and Z .

6. $XY = 5x$, $YZ = x$, and $XZ = 25$

7. $XY = 12$, $YZ = 2x$, and $XZ = 28$

8. $XY = 4x$, $YZ = 3x$, and $XZ = 42$

9. $XY = 2x + 1$, $YZ = 6x$, and $XZ = 81$

Determine whether each pair of segments is congruent.

